












ANASINIFLARI

5 RAKAMI



Aşağıdaki resimde kaç tane elma bulunmakta? Söyleyiniz. Beş rakamlarını ve kristallerinin üzerinde 5 yazılı olan kristallerin boyamasını yapalım.



Aşağıdaki rakamların yazılışlarının üzerinden geçelim.

5	5	5	5	5	5	5
5	5	5	5	5	5	5
5	5	5	5	5	5	5