



EŞİTLİK KAVRAMI

Dengede duran terazideki noktalı yere gelmesi gereken sayıları bulalım.


1.




2.




3.




4.




5.




6.




7.




8.




9.




10.




11.




12.



13.



14.



Aşağıdaki eşitliklerde noktalı yerlere gelmesi gereken sayıları bulalım.

$$1. \quad \dots + 4 = 6 + 7$$

$$2. \quad 10 - \dots = 2 + 3$$

$$3. \quad \dots + 5 = 4 + 3$$

$$4. \quad 11 + \dots = 6 + 7$$

$$5. \quad \dots + 4 = 5 + 8$$

$$6. \quad 13 - \dots = 3 + 7$$

$$7. \quad 5 + 4 = 6 + \dots$$

$$8. \quad 7 + \dots = 6 + 7$$

$$9. \quad 9 - \dots = 12 - 7$$

$$10. \quad \dots - 5 = 9 - 7$$

$$11. \quad 4 - \dots = 12 - 9$$

$$12. \quad 4 + 4 = 8 + \dots$$

$$13. \quad 14 - \dots = 6 + 1$$

$$14. \quad 8 - \dots = 9 - 6$$

$$15. \quad 5 + 6 = \dots + 2$$

$$16. \quad 16 - \dots = 6 + 7$$

$$17. \quad \dots - 3 = 14 - 7$$

$$18. \quad 9 + \dots = 6 + 8$$

$$19. \quad 15 - \dots = 4 + 6$$

$$20. \quad 15 + \dots = 16 + 7$$

$$21. \quad 8 + \dots = 5 + 8$$

$$22. \quad 1 + \dots = 10 + 8$$

$$23. \quad 18 - \dots = 4 + 9$$

$$24. \quad 6 + \dots = 10 - 2$$

$$25. \quad 17 - \dots = 2 + 5$$

$$26. \quad 16 + 8 = 30 - \dots$$

$$27. \quad 48 + \dots = 32 + 25$$

$$28. \quad 25 - \dots = 9 + 8$$

$$29. \quad 56 + \dots = 48 + 39$$

$$30. \quad \dots - 26 = 12 + 9$$